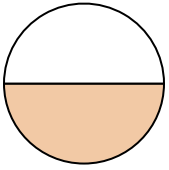




Determine which letter best describes the shaded portion.

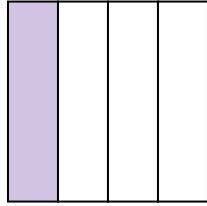
**Answers**

1)



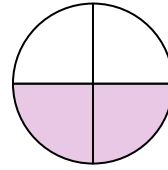
- A. three-fourths
- B. one-half
- C. two-fourths

2)



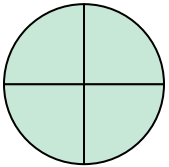
- A. one-quarter
- B. three-quarters
- C. two-halves

3)



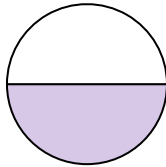
- A. one-fourth
- B. one-half
- C. two-quarters

4)



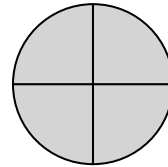
- A. two-halves
- B. four-fourths
- C. three-fourths

5)



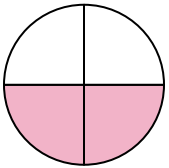
- A. one-half
- B. two-quarters
- C. four-fourths

6)



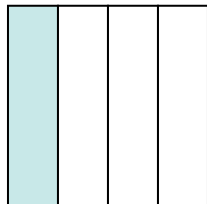
- A. two-halves
- B. four-fourths
- C. one-quarter

7)




- A. two-fourths
- B. three-fourths
- C. one-half

8)



- A. one-quarter
- B. three-quarters
- C. two-halves

9)

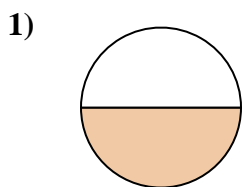


- A. four-fourths
- B. two-halves
- C. three-quarters

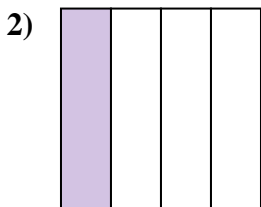
- 1. \_\_\_\_\_
- 2. \_\_\_\_\_
- 3. \_\_\_\_\_
- 4. \_\_\_\_\_
- 5. \_\_\_\_\_
- 6. \_\_\_\_\_
- 7. \_\_\_\_\_
- 8. \_\_\_\_\_
- 9. \_\_\_\_\_



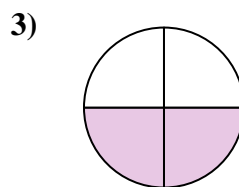
Determine which letter best describes the shaded portion.



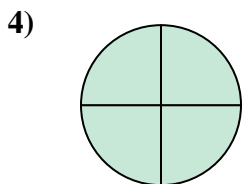
- A. three-fourths
- B. one-half
- C. two-fourths



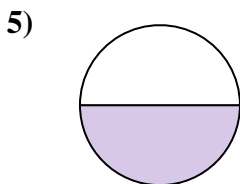
- A. one-quarter
- B. three-quarters
- C. two-halves



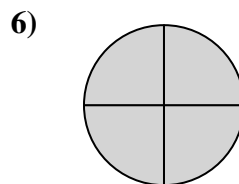
- A. one-fourth
- B. one-half
- C. two-quarters



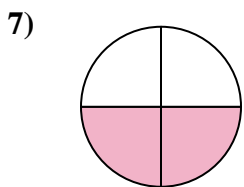
- A. two-halves
- B. four-fourths
- C. three-fourths



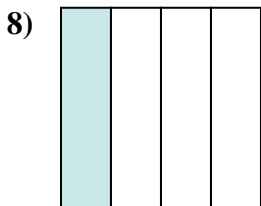
- A. one-half
- B. two-quarters
- C. four-fourths



- A. two-halves
- B. four-fourths
- C. one-quarter



- A. two-fourths
- B. three-fourths
- C. one-half



- A. one-quarter
- B. three-quarters
- C. two-halves



- A. four-fourths
- B. two-halves
- C. three-quarters

**Answers**

1.     **B**    

2.     **A**    

3.     **C**    

4.     **B**    

5.     **A**    

6.     **B**    

7.     **A**    

8.     **A**    

9.     **B**